


RETO MATEMÁTICO DE PAULA




Piensa un número.

Calcula el doble del número





Súmale seis


Calcula la mitad



Resta el número
que habías pensado




RETO MATEMÁTICO DE PAULA




Piensa un número.

Calcula el doble del número





Súmale seis

Calcula la mitad



Resta el número
que habías pensado



Sale 3

